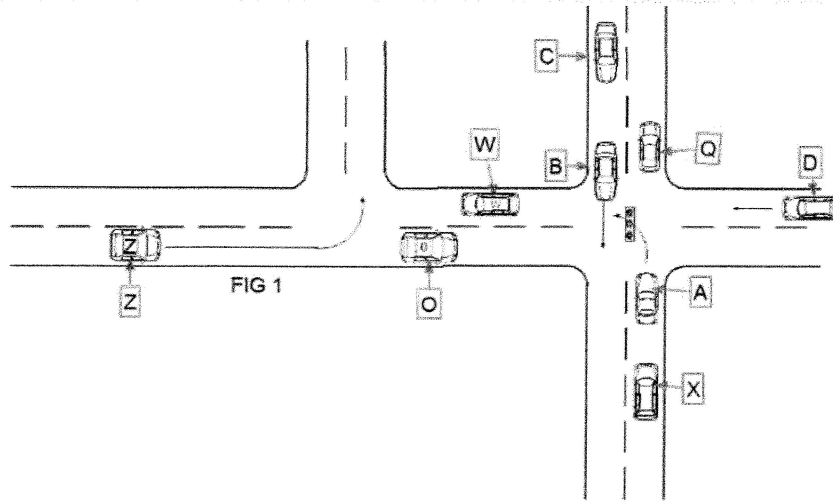
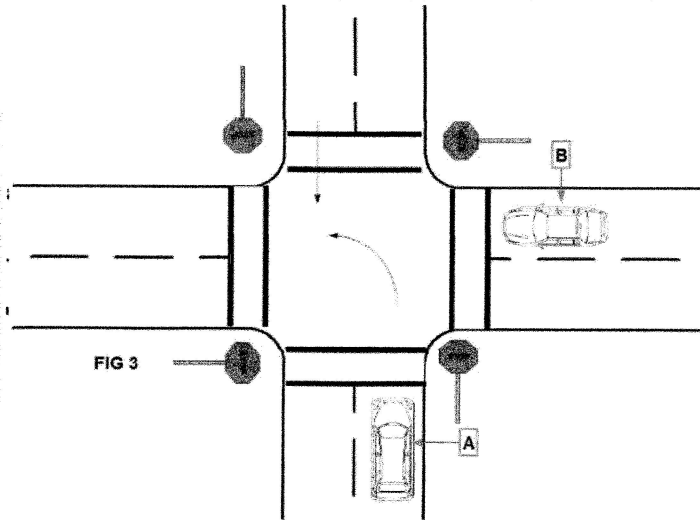


DO NOT WRITE ON THIS SHEET

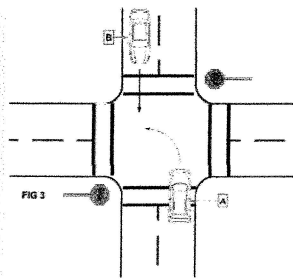


1. The name of this intersection with the light is : A. protected turn B. Caution light C. unprotected left turn D. must go straight ahead
2. Porsche A wants to make a left turn at this light. Where should he position his car to best do this?
A. He is fine where he is with wheels straight B. pulls to the center of the intersection with wheels turned straight C. pull up Even to the curb with wheels turn left ready to go
3. To make this left turn safely , Porsche A should: A. turn in front of B B. turn right as this is illegal C. turn between Band C D. turn after car c
4. Car Z wants to turn left. In order to do this , Car Z : A. has the right of way by law B. must yield to car W C. cannot legally turn here D. must always stop first before a left turn here
5. As Porsche A makes his/her decision on when to go, the most dangerous component that is most overlooked or misjudged is: A. Car A B. Car B C. Car C D. Car D
6. Before Porsches A makes the turn he/she much always clear: A. left-right-left B. left-right-center C. left-right-left-center D. left-right
7. As Porsche A clears, the key clear in the situation is: A. center B. left C. right D. rear
8. Which vehicles have the right of way by law in this situation? A. C & D B. A C. B & C D. 0
9. If the light turns yellow or red on Porsche (A) he /she can do what ? A. turn left if it is clear B. turn right if it is clear C. It is illegal to go
10. As Porsche A waits in the middle of the intersection to turn left, Corvette X could legally:
A. pass on the right B. wait until A moves out of the way C. pass on the left D. U-Turn
11. If the light was a protected left turn, there would be: A. left turn arrow B. right turn arrow C. 2 arrows left and right D. left turn bell

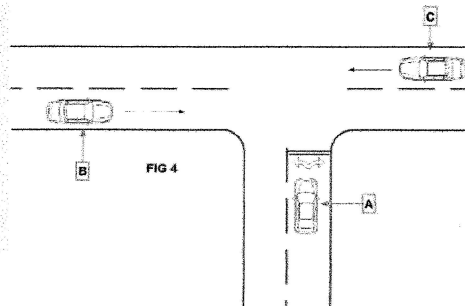
DO NOT WRITE ON THIS SHEET



12. If you are driving Car B: A. stop and proceed with caution B. stop and wave car A on C. do not stop because you are on the right D. A goes first
13. What kind of intersection is this: A. 4-way stop B. multilane with 2 lanes C. uncontrolled D. 4-way yield
14. What if Car A got there first? Who would go first? A. A B. B
15. What if A & B got there at the same time? A. A goes first B. B goes first C. both go D. whoever is turning left waits?

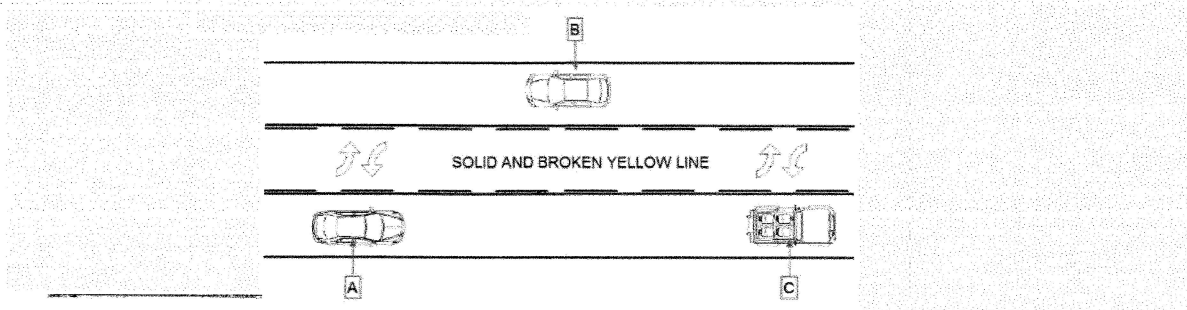


16. Who goes first if Car A is turning left? A. A B. B C. both go at the same time
17. What if Car B is turning left also? Who goes first? A. A B. B C. both go at the same time

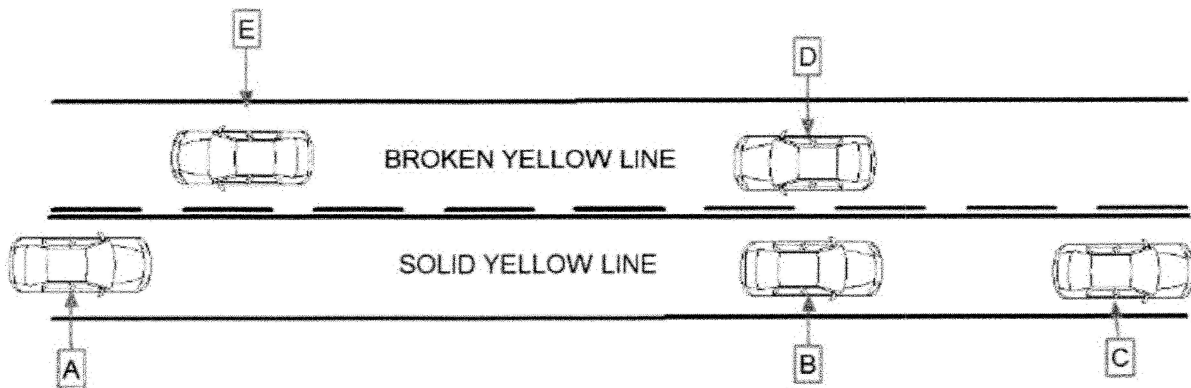


18. Who has the right of way at this intersection? A. A B. A & B C. C D. B & C
19. What is the name of this intersection? A. T-Intersection B. big road/little road C. 3-way stop D. uncontrolled intersection

DO NOT WRITE ON THIS SHEET



20. You are driving Car A, you may legally use the middle lane: A. never B. to pass C. to stop D. for left turn
21. You are driving Car B, the solid yellow line tells you: A. pass when clear B. speed up C. never pass D. pass only if broken yellow line is present



22. You are driving Car D, you may: A. pass when clear B. never pass here C. speed up only D. never cross broken yellow line
23. You are driving Car B, you may: A. pass when clear B. never pass here C. speed up only D. never cross broken yellow line
24. You are driving Car A, you may: A. pass when clear B. never pass here C. speed up only D. never cross broken yellow line
25. What does a white line tell you? A. line is passing B. Line is no passing. C. One way traffic D. Two way traffic
26. What is does a yellow line tell you? A. line is passing B. Line is no passing. C. One way traffic D. Two way traffic

DO NOT WRITE ON THIS SHEET

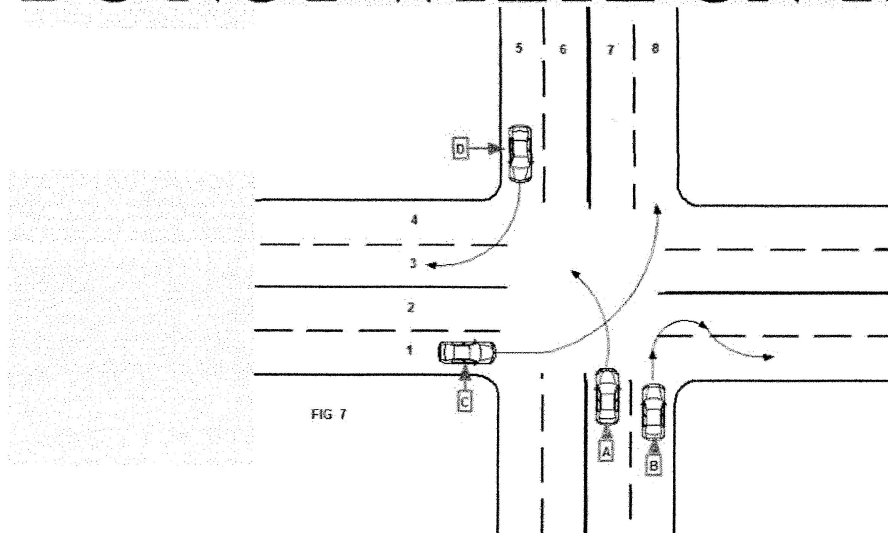


FIG 7

27. You are driving Car A, which lane or lanes can you legally turn left into? A. 3 B. 4 C. 2 D. 1
28. Which car is making a very dangerous and illegal right turn? A. A B. B C. C D. D
29. You are driving Car C; you have made a left turn. It is: A. legal B. illegal
30. If Car C's turn is illegal, why? A. turned into wrong lane B. too fast C. turned out of wrong lane D. cannot turn left here

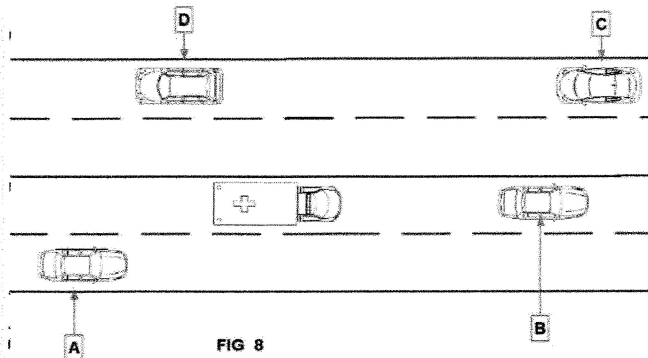



FIG 8

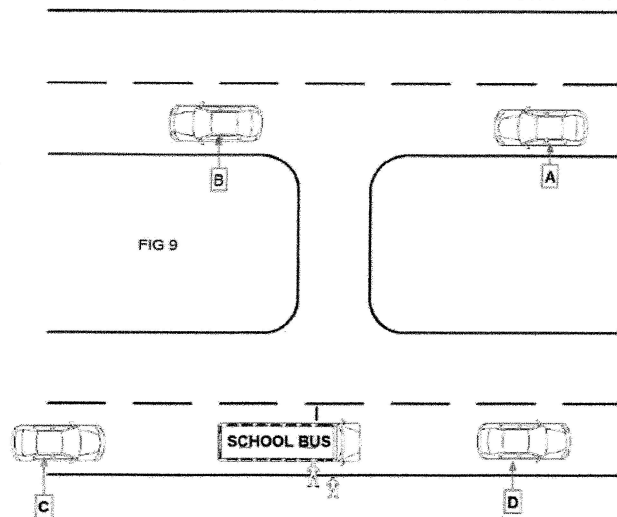
31. An emergency vehicle is in sight. You are driving Car B, you should: A. stop immediately B. pull off to the left C. pull to the right or clear a path D. speed up
32. Which vehicle would you continue on without worrying about an emergency vehicle? A. A B. B C. C D. D



**FLASHING
YELLOW
LIGHT**

33. If you are driving and approach this light, you should: A. continue on at the same speed B. proceed with caution C. stop immediately D. forget it

DO NOT WRITE ON THIS SHEET



34. You are driving Car A, what would you do in this situation? A. stop B. pull to right C. continue on at a slow speed D. continue on at a regular speed
35. You are driving Car C, what would you do? A. stop B. pull to right C. continue on at a slow speed D. continue on at a regular speed
-
36. When entering the freeway, who has the right of way by law? A. vehicle on freeway B. vehicle entering freeway C. vehicle on feeder road D. vehicle that stops first
37. When exiting the freeway, who has the right of way by law? A. vehicle exiting freeway B. vehicle on feeder road in the right lane C. vehicle on feeder road in the left lane D. vehicle that stops first
38. When you drive on streets other than the freeway and you are not sure of the speed limit, most likely it is: A. 20 mph B. 30 mph C. 40 mph D. 50 mph
39. The officer can only give you a speeding ticket if you are driving: A. 5 mph over the speed limit B. 10 mph over the speed limit C. the posted speed limit D. all of the above
40. When driving in a school zone of 20 mph in the summer or when school is out: A. the law is still in effect on the sign B. disregard as school is out C. only applies to public schools in this situation D. only applies to private schools in this situation
41. When making a U-Turn, we go to the: A. bottom of opening B. middle of opening C. wherever it looks good D. top of opening
42. When driving on the freeway, we want to drive with the flow of traffic: A. always in good weather B. always regardless of speed C. only if flow of traffic is within speed limit D. only if we can get to left lane
43. It is safe to wave someone on only if we: A. have the right of way B. never C. if we think it is clear for the other driver D. only at intersections

Driving with **Coach Adams**



Match the following – write only the letter on the proper blank (all letters used only once)

- | | |
|-----------------------------|---|
| 47.solid yellow line | • A. recommended to not cross |
| 48.broken white line | • B. one way traffic |
| 49.red sign | C. center lane of road |
| 50.orange sign | • D. hospital, food, gas |
| 51.broken yellow line | • E. construction |
| 52.solid white line | • F. never pass here going this direction |
| 53.yellow sign | • G. caution and dangerous, watch out |
| 54.double solid yellow line | • H. usually at feeder road exits, do not cross |
| 55.blue signs | • I. stop |
| 56.double solid white line | • J. two way traffic |